
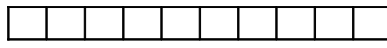


	<h1 style="margin: 0;">LES OPÉRATIONS</h1> <p style="margin: 0;">(06)</p>
---	---

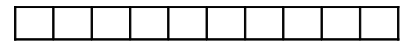
• Colorie, barre et complète suivant l'exemple :



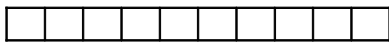
$9 - 4 = 5$



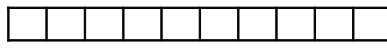
$10 - 5 = \dots$



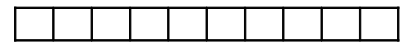
$9 - 7 = \dots$



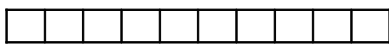
$8 - 6 = \dots$



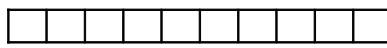
$10 - 9 = \dots$



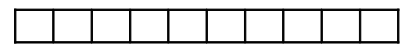
$7 - 7 = \dots$



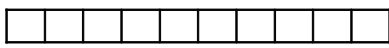
$10 - 4 = \dots$



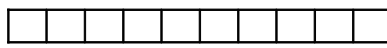
$10 - 2 = \dots$



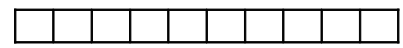
$9 - 2 = \dots$



$10 - \dots = 9$



$9 - \dots = 3$



$\dots - 5 = 5$


• Observe et complète :

$10 = 9 + 1$	$10 - 9 = 1$ $10 - 1 = 9$
$10 = 6 + 4$	$10 - \dots = 4$ $10 - \dots = 6$
$9 = 6 + 3$	$9 - \dots = 3$ $\dots - \dots = 6$

$9 = 7 + 2$	$9 - \dots = 2$ $9 - \dots = 7$
$8 = 2 + 6$	$8 - \dots = 6$ $\dots - \dots = 2$
$9 = 1 + 8$	$9 - \dots = 8$ $9 - \dots = \dots$


$10 = 7 + 3$	$10 - \dots = 3$ $10 - \dots = 7$
$10 = 8 + 2$	$10 - \dots = 2$ $10 - \dots = \dots$
$8 = 0 + 8$	$8 - \dots = 8$ $8 - \dots = \dots$

• Complète suivant les exemples :




$6 + 3 = 9$

$$\begin{array}{r} 6 \\ + 3 \\ \hline 9 \end{array}$$




$9 - 6 = 3$

$$\begin{array}{r} 9 \\ - 6 \\ \hline 3 \end{array}$$



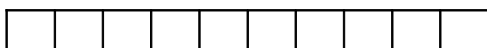
$3 + 7 = \dots$

$$\begin{array}{r} 3 \\ + \dots \\ \hline \dots \end{array}$$



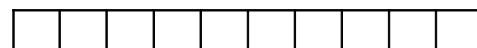
$8 - 3 = \dots$

$$\begin{array}{r} \dots \\ - 3 \\ \hline \dots \end{array}$$



$5 + \dots = 10$

$$\begin{array}{r} 5 \\ + \dots \\ \hline \dots \end{array}$$



$10 - \dots = 7$

$$\begin{array}{r} \dots \\ - \dots \\ \hline \dots \end{array}$$